

JAWAPAN PEPERIKSAAN PERCUBAAN KEDAH TAHUN 2020

1. a)  $p = -3$

b)  $f(1) = \frac{1}{2}$

① Tak faham maksud  
f. tak f. tak f.

2.  $2x^2 \leq 1 + x$   
 $2x^2 - x - 1 \leq 0$  ✓  
 $(2x + 1)(x - 1) \leq 0$  ✓

⑤ Tak  
mau  
pembetulan

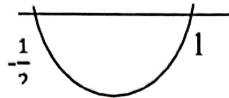
① Tak kuasai asas  
pny. ketaksamaan  
kuadratik

$\Rightarrow ax^2 + bx + c \leq 0$

② Mambaw ketaksamaan kpd  
persamaan.

③ Kesilapan ketaksamaan

④ Salah kedah.  
Muid guna  $b^2 - 4ac$   
utla cari ketaksamaan  
bg nilai  $x$ .



The range is  $-\frac{1}{2} \leq x \leq 1$  ✓  
3

3.  $v = 6t - t^2$

$6t - t^2 > 5$  ✓  
11111

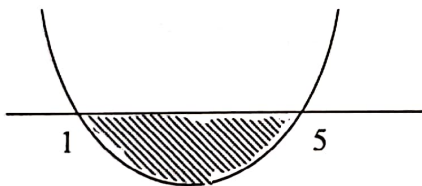
$t^2 - 6t + 5 < 0$  ✓

$(t - 1)(t - 5) < 0$  ✓  
2

$1 < t < 5$  ✓  
3

① Tak faham  
maksud  
halaju lebih dari 5

② Guna  $b^2 - 4ac$  utla  
car julat  $t$ .



4.

a)  $27^{-\log_3 y} = 64$

$3^{\log_3 y^{-3}} = 4^3$  ✓  
1

$y^{-3} = 4^3$

$y = \frac{1}{4}$  ✓  
2

① salah mms indeks / log

② Muid tak faham mambaw log ke indeks

③ Tak dpt beralean asas log dan  
argument log.

$\log_{125}$  ditcar  $\log_{125} 125$

b)  $\log_{125} - [\log_3(5x - 7)] = \frac{1}{3}$

$\log_3(5x - 7) = \sqrt[3]{25}$  ✓  
1

$5x - 7 = 3^5$

$x = 50$  ✓  
2

5.  $S_{6-18} = S_{18} - S_5$  ✓  
 $= \frac{9(18) - 3(18)^2}{2} - \frac{9(5) - 3(5)^2}{2}$  ✓  
 $= -390$  ✓

- ① Cukai 18 ditulis 8  
 ② kemalar numer 55 diberi  
 dan soalan.  
 Cth:  $S_n = \frac{9n - 3n^2}{2}$  dikau  $S_n = \frac{n}{2} [2a + (n-1)d]$   
 lepel  
 ③  $S_{6 \rightarrow 18} = S_{18} - S_5$  sepatutnya  $S_{6 \rightarrow 18} = S_{18} - S_5$

6.  $r = \frac{18}{6} = 3$  ✓  
 $k = 6(3)^{4-1} = 162$   
 ① salah numer  
 panjang.  
 ② Cukai  $\frac{18}{6} = 2$

7.  $a = 4, d = 16 - 4 = 12$

$S_n = 580$

$\frac{n}{2} [2(4) + (n-1)12] = 580$  ✓

$12n^2 - 4n - 1160 = 0$

$3n^2 - n - 290 = 0$

$(3n+29)(n-10) = 0$  ✓

$n = 10$  ✓

- ① Salah faham soalan // gagal  
 membezakan  $T_n$  dan  $S_n$   
 ② tak dpt bezakan soalan  
 panjang dan soalan  
 pilihah/gebungen

8. a)  $p = 100 - \frac{1}{4}x$   
 $x = 400 - 4p$

$c = \frac{\sqrt{400 - 4p}}{25} + 600$

$c = \frac{2\sqrt{100 - p}}{25} + 600$

b)  $c = \frac{2\sqrt{100 - (36)}}{25} + 600$   
 $= 600.64$

Tak dapat kritikan soalan  
 dgn fungsi gubahan.

9.  $x = 3$

Isipadu cat =  $100(3x) \times 100(5-x) \times 0.3$   
 Pd bill board  
 $= 9000(5x - x^2) \text{ cm}^3$

Isipadu cat  
 dipukul =  $20(\pi r^2 h) - 20(0.6(2))$   
 $= 54000 \text{ cm}^3$

① either  
 one.

$9000(5x - x^2) = 54000$  ✓

$x^2 - 5x + 6 = 0$

$(x-2)(x-3) = 0$  ✓

$x = 2 \text{ cm}$  -26-  $x = 3 \text{ cm}$  ✓

10.  $3 = 5^p, (3.5)^r = 5^q$

$(5^p \cdot 5)^r = 5^q$

$\left(\frac{q}{p} + 1\right)r = q$

$\left(\frac{q+p}{p}\right)r = q$

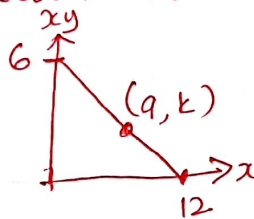
$r = \frac{pq}{q+p}$

11.

a)  $m = \frac{6-0}{0-12}, -\frac{1}{2}$   
 $xy = -\frac{1}{2}(x) + 6$   
 $y = -\frac{1}{2} + \frac{6}{x}$

1) Mavid tak dapat membaca koordinat pd dinding tersebut yang (0,6)

soalan ada kesilapan



b)  $-\frac{1}{2} = \frac{6-k}{0-9}$   
 $k = \frac{1}{6}$

12.

Perlu gambar skema

a)  $\frac{120^\circ}{180^\circ} \times 3.142 = 2.095 \text{ rad}$

b) Area two segments =  $2\left[\frac{1}{2}r^2(\theta - \sin \theta)\right]$   
 $= 2\left[\frac{1}{2}(6)^2(2.095 - \sin 120^\circ)\right]$   
 $= 2[18(1.229)]$   
 $= 44.24 \text{ cm}^2$

Luas kawasan berlorek (sah bulatan) =  $113.112 - 44.24$   
 $= 68.872$

LKB =  $2(68.872)$   
 $= 137.74 \text{ cm}^2$   
 $137.75 \text{ cm}^2$

Area of one circle =  $\frac{1}{2}r^2\theta$   
 $= \frac{1}{2}(6)^2\left(\frac{360^\circ}{180^\circ} \times 3.142\right)$   
 $= 113.112 \text{ cm}^2$

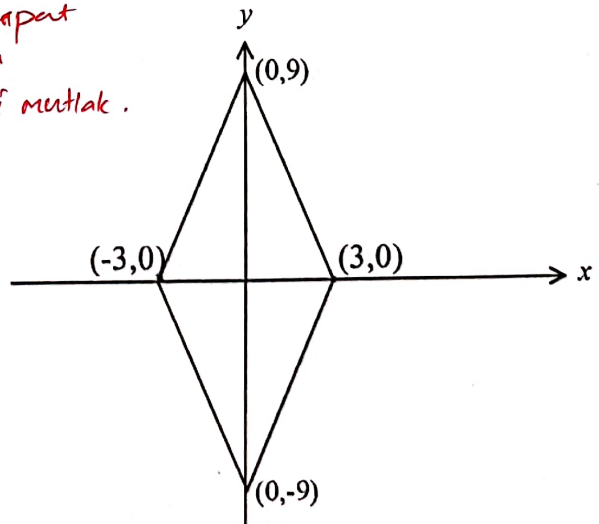
1) Tak dpt tentukan sudut sektor

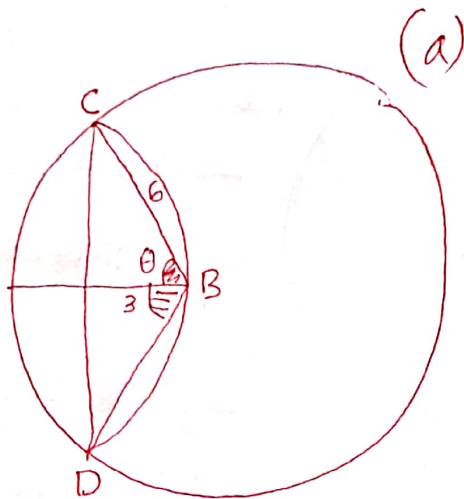
13.

$6x + 2y = 18$   
 $-6x + 2y = 18$   
 $6x - 2y = 18$   
 $-6x - 2y = 18$

1) Pelajar tak dapat keluarkan psm dari bta nilai mutlak.

Luas =  $\frac{1}{2} \begin{vmatrix} 0 & -3 & 0 & 3 & 0 \\ 9 & 0 & -9 & 0 & 9 \end{vmatrix}$   
 $= \frac{1}{2} |(27 + 27) - (-27 - 27)|$   
 $= \frac{1}{2} |108|$   
 $= 54 \text{ unit}^2$





$$\cos \theta = \frac{3}{6} = \frac{1}{2}$$

$$\theta = 60^\circ$$

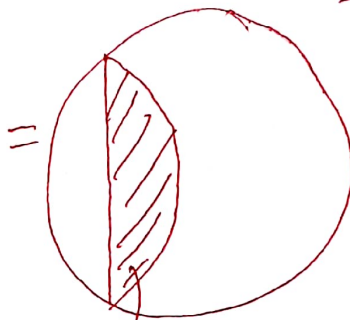
$$\angle CBD = 2 \times 60^\circ$$

$$= 120^\circ$$

$$= \frac{120}{180} \times \pi$$

$$= \frac{2}{3} \pi \text{ rad.}$$

$$= 2.0947 \text{ rad.} \#$$

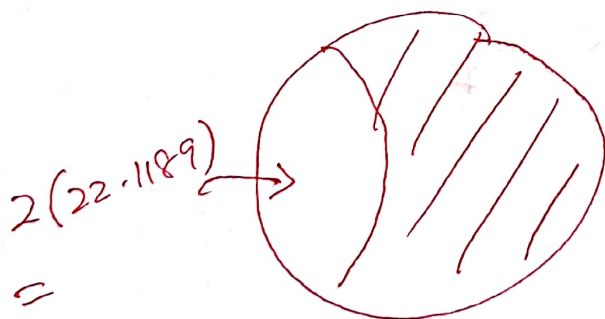


luas  
tombong  
minor

$$(b) = \frac{1}{2} r^2 (\theta - \sin \theta)$$


$$= \frac{1}{2} (6)^2 (2.0947 - \sin 2.0947)$$

$$= 22.1189 \text{ cm}^2.$$



$$\text{LKB} = \pi r^2 - 2(22.1189)$$

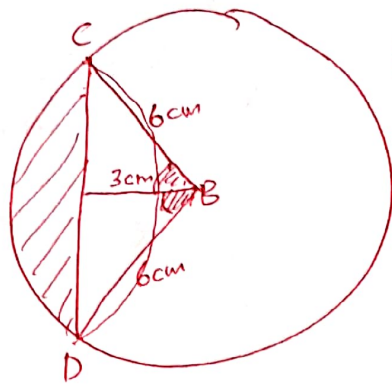
$$\text{bg satu} = 68.8742$$



$$= 2(68.8742)$$

$$= 137.7484$$

$$= 137.75 \text{ cm}^2 \#$$



(b)

$$\angle CBD = 2.0947 \text{ rad.}$$

$$\text{Luas segment minor} = \text{Luas Sektor} - \text{Luas Segitiga}$$

$$= \frac{1}{2} r^2 \theta - \frac{1}{2} r^2 \sin \theta$$

$$= \frac{1}{2} (6)^2 (2.0947) - \frac{1}{2} (6)^2 \underbrace{\sin 2.0947}_{\text{mode dlm radian.}}$$

$$= ~~37.1046~~ -$$

$$= \frac{1}{2} 6^2 [2.0947 - \sin 2.0947]$$

$$= 22.1189$$

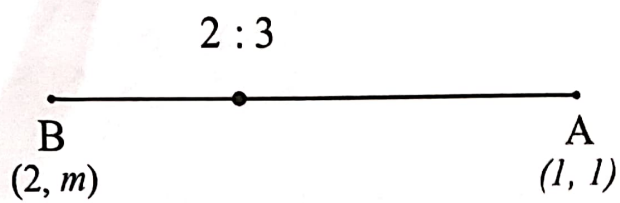
$$\text{Luas Kawasannya Berlonak} = 2 \left[ \text{Luas buletan} - 2 \times \text{Luas segment} \right]$$

$$= 2 \left[ \frac{1}{2} r^2 (2\pi) - 2 (22.1189) \right]$$

$$= 137.7484$$

$$= 137.75 \text{ cm}^2 \#$$

14.



$$\text{Koordinat} = \left( \frac{3(2) + 2(1)}{2+3}, \frac{3(m) + 2(1)}{2+3} \right) \quad \checkmark (1)$$

$$= \left( \frac{8}{5}, \frac{3m+2}{5} \right)$$

$$2x + y = k$$

$$2\left(\frac{8}{5}\right) + \frac{3m+2}{5} = k \quad \checkmark (2)$$

$$m = \frac{5k-18}{3} \quad \checkmark (3)$$

salah tulis nisbah  $x_A : x_B$   
 jaw betul:  $x_A : x_B = 3 : 2$   
 muid tulis  $x_A : x_B = 2 : 3$

15.

$$\overline{AB} = \lambda \overline{AM} \quad \checkmark (1)$$

Perbandingan komponen  
 komponen  $\underline{i}$   
 $\lambda = 2, \quad \checkmark$   
 komponen  $\underline{j}$   
 $\lambda = \frac{5}{3} \quad \checkmark (2)$

(1) Tak dapat kaitkan soalan dgn vektor selari dan sifat segaris

Tidak kena tembakan pada kapal perang B kerana tidak segaris dengan Kapal perang A dan Kapal Perang musuh.  $\checkmark (3)$

16.

$$2k - h = -5$$

$$k = \frac{h-5}{2} \quad \checkmark (2)$$

$$-(2k-h) = 5 \quad \checkmark (1)$$

$$2k-h = -5$$

Tak false nilai mutlak.

17.

$$\delta r = 0.03r \quad \checkmark (1)$$

$$V = \frac{4}{3}\pi r^3$$

$$\frac{dV}{dr} = 4\pi r^2$$

$$\delta V = \frac{dV}{dr} \cdot \delta r$$

$$\delta V = 4\pi r^2 (0.03r)$$

$$\delta V = 0.12\pi r^3 \quad \checkmark (2)$$

$$\% \text{ error in volume} = \frac{\delta V}{V} \times 100\%$$

$$= \frac{0.12\pi r^3}{\frac{4}{3}\pi r^3} \times 100\%$$

$$= 9\% \quad \checkmark (3)$$

Tak False maksud kesilapan 3%  
 jaw:  $\delta r = 3\%$   $r = 0.03r$   
 muid ambil  $r = 3\%$

18.

$$a) \frac{3(-p)}{5} = -\frac{3}{5}p$$

$$b) \int_1^4 4dx + \int_1^4 g(x)dx = [4x]_1^4 + p = 12 + p$$

19.

$$\int_1^k \frac{5}{x^2} dx = \int_k^5 \frac{5}{x^2} dx$$

$$\left[ -\frac{5}{x} \right]_1^k = \left[ -\frac{5}{x} \right]_k^5$$

$$\left( -\frac{5}{k} \right) - \left( -\frac{5}{1} \right) = \left( -\frac{5}{5} \right) - \left( -\frac{5}{k} \right)$$

$$k = \frac{5}{3}$$

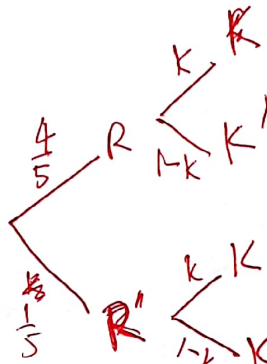
① Muid tak boleh lakukan kamiran  $\int 5x^{-2} dx$

20.

$$(a) \frac{1}{5} \times (1-k) = \frac{1}{15}$$

$$\frac{1}{5} \times (1-k) = \frac{1}{15}$$

$$k = \frac{2}{3}$$



① Muid tak dapat bezakan soalan kebarangkalian dan soalan polinomial

$$(b) P(1 \text{ org sahaja dipilih}) = \left( \frac{4}{5} \times \frac{1}{3} \right) + \left( \frac{1}{5} \times \frac{2}{3} \right)$$

$$= \left( \frac{2}{5} \right)$$

1- Tidak penuhi jawapan.

21.

Diketahui  $y = 2 \sin 2x$

$$2 \sin 2x = \frac{1}{2}$$

$$\sin 2x = \frac{1}{4}$$

$$2x = \sin^{-1} \frac{1}{4}$$

$$2x = 14.48^\circ, 165.52^\circ, 374.48^\circ, 525.52^\circ$$

$$x = 7.24^\circ, 82.76^\circ, 187.24^\circ, 262.76^\circ$$

① muid mengabaikan 2 kitaran lengkap  
 jaw:  $y = 2 \sin 2x$   
 muid tulis  $y = 2 \sin x$ .

② Muid tidak dapat menulis persamaan trigonometri dari grafik trigonometri yg diberi.

22. (a) Number of ways of choosing 3 out of 5 boys =  ${}^5C_3$   
 Number of ways of choosing 2 out of 5 girls =  ${}^5C_2$   
 Therefore, the number of ways of choosing 3 boys and 2 girls in the team

$$= {}^5C_3 \times {}^5C_2 \quad \checkmark ①$$

$$= 10 \times 10$$

$$= 100 \quad \checkmark ②$$

① Salah operasi  
 dup: x  
 mudi guna +  
 ② Mudi tak dpt selesai  
 msh melibatkan operasi  
 ketaksamaan  
 "Selehang-kurangnya"  
 BP BL

(b) Number of ways of choosing 3 out of 5 girls =  ${}^5C_3$   
 Number of ways of choosing 4 out of 5 girls =  ${}^5C_4$   
 Number of ways of choosing 5 out of 5 girls =  ${}^5C_5$

Therefore, the number of ways of choosing at least 3 girls in the team

$$= {}^5C_3 + {}^5C_4 + {}^5C_5$$

$$= 10 + 5 + 1$$

$$= 16$$

③ Salah numerus.  
 ${}^5C_3 {}^5C_2 + {}^5C_4 {}^5C_1 + {}^5C_5 {}^5C_0$   
 $= 126.$

23.  $\sum x^2_{New} = 1250 - 7^2 \quad \checkmark 1$

$$\sum x^2_{New} = 1201$$

$$9 = \frac{\sum x}{6}$$

$$\sum x_{new} = 54 - 7$$

$$x = \frac{47}{5}$$

$$\sigma^2 = \sqrt{\frac{1201}{5} - \left(\frac{47}{5}\right)^2} \quad \checkmark 2$$

$$12.31 \quad \checkmark 3$$

① Tak faham numerus  
 varians data tak  
 terlengkap.  
 ② Kesilapan mengenali past soalan  
 tab. binomial dan statistik

24.  $4 = 8p \quad \checkmark$

$$p = \frac{1}{2} \text{ or } 0.5$$

① Tak faham numerus min Tab. Binomial.

25.  $2 = \frac{50 - \mu}{\sigma} \quad \checkmark ①$

$$-0.97 = \frac{32.18 - \mu}{\sigma} \quad \checkmark ②$$

$$\sigma = 6, \mu = 38 \quad \checkmark ③$$

① Tak prihatin aysat bertabur secara  
 normal.  
 ② Tak bezakan soalan skor-2 dan  
 $P(X > k)$ . /  $P(X < k)$